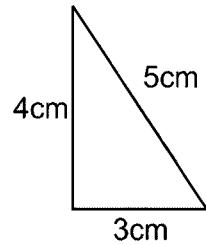


Time: 10 Minutes	Paper Math 3	Total Marks: 10
------------------	--------------	-----------------

6th Month, 1st Week, 5th Day	Syllabus: Unit 6. Exercise # 2. Q # 5, 6.
------------------------------	---

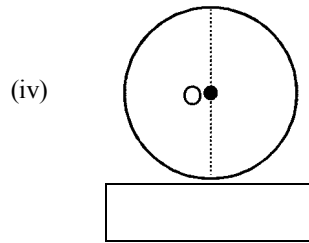
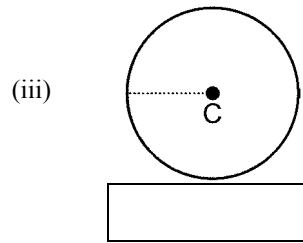
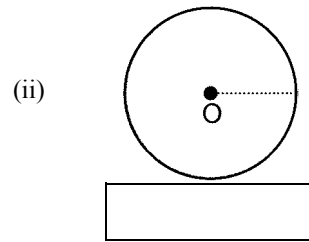
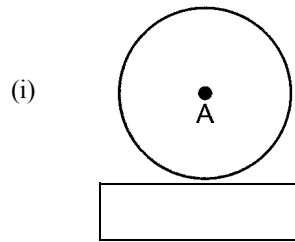
Q.1. Find the perimeter of the following triangle. (5)

درج ذیل مثلث کا احاطہ معلوم کریں۔



Q.2. Identify the centre radius and diameter in the following. (5)

درج ذیل میں سے مرکز، رداس اور قطر کی نشان دہی کریں۔

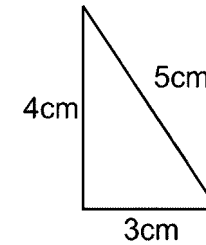


Time: 10 Minutes	Paper Math 3	Total Marks: 10
------------------	--------------	-----------------

6th Month, 1st Week, 5th Day	Syllabus: Unit 6. Exercise # 2. Q # 5, 6.
------------------------------	---

Q.1. Find the perimeter of the following triangle. (5)

درج ذیل مثلث کا احاطہ معلوم کریں۔



Q.2. Identify the centre radius and diameter in the following. (5)

درج ذیل میں سے مرکز، رداس اور قطر کی نشان دہی کریں۔

